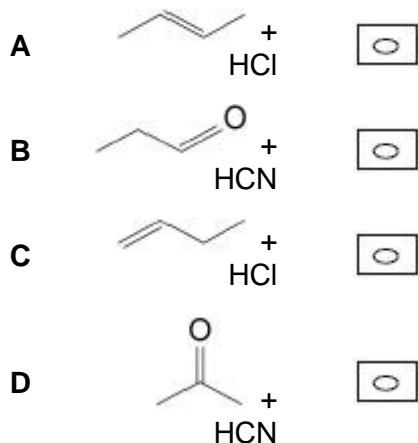


Q1.

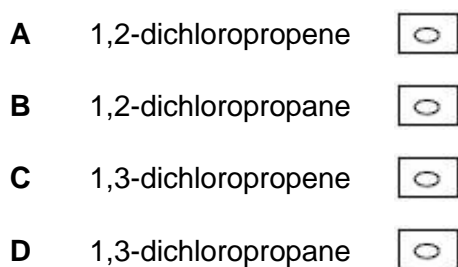
Which pair of compounds does **not** form a racemic mixture when the compounds react?



(Total 1 mark)

Q2.

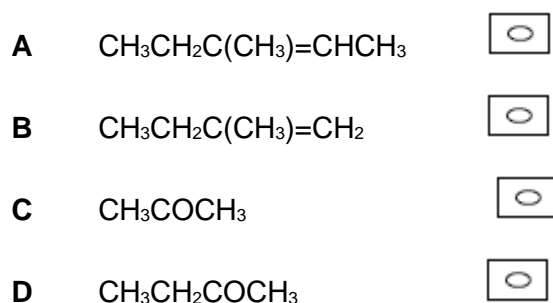
Which compound does **not** show stereoisomerism?



(Total 1 mark)

Q3.

Which compound forms optically active compounds on reduction?



(Total 1 mark)